



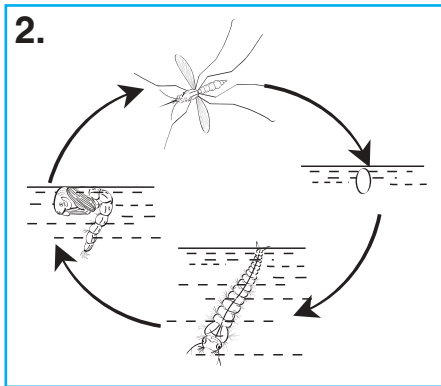





Classification

Study each picture carefully. Write down the characteristic of living things that is shown in each picture in the blanks below.



- 1. Living things _____
- 2. Living things _____
- 3. Living things _____
- 4. Living things _____
- 5. Living things _____
- 6. Living things _____
- 7. Living things _____

- Answers:**
- 1. Living things can grow.
 - 2. Living things can reproduce.
 - 3. Living things need air.
 - 4. Living things will die.
 - 5. Living things can respond to changes around them.
 - 6. Living things can move.
 - 7. Living things need water and food.