



# Review 7

20

Choose the correct answer and write its number in the brackets provided. [7 marks]

1. Which of the following shows the correct time of 12.29 pm using the 24-hour clock?
- (1) 00 29                      (3) 20 29  
 (2) 12 29                      (4) 23 29                      (    )
2. The clocks below show the duration Brian takes to type a sentence.



How many seconds does Brian take to type the sentence?

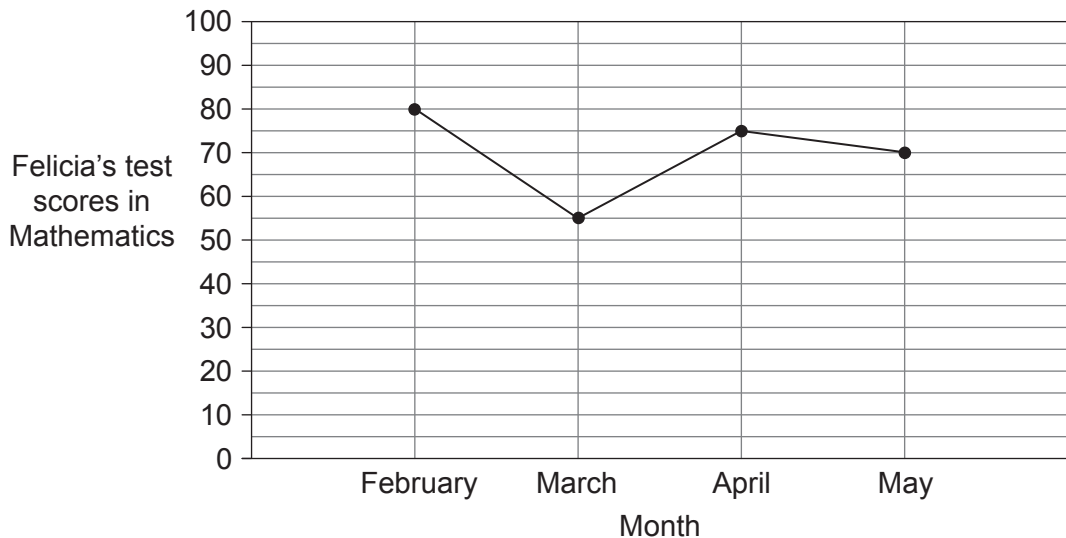
- (1) 4                                  (3) 30  
 (2) 20                              (4) 40                              (    )

The table shows the heights of four boys. Study the table below and answer questions 3 and 4.

Name	Height
Andy	140 cm
Brandon	?
Colin	142 cm
Derrick	136 cm

3. If the total height of the four boys is 557 cm, what is Brandon’s height?
- (1) 138 cm (3) 140 cm  
(2) 139 cm (4) 141 cm ( )
4. What is the difference between Brandon’s height and Derrick’s height?
- (1) 6 cm (3) 3 cm  
(2) 2 cm (4) 4 cm ( )

The line graph shows Felicia’s test scores in Mathematics from February to May. Study the line graph and answer questions 5 to 7.



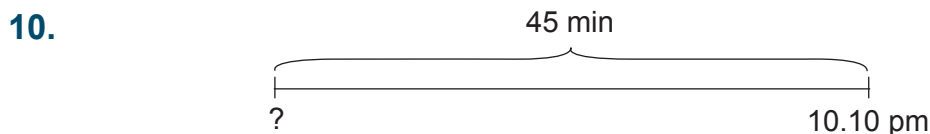
5. What was Felicia’s test score in Mathematics in March?
- (1) 65 (3) 55  
(2) 60 (4) 50 ( )
6. What was the difference between Felicia’s test scores in Mathematics in February and in May?
- (1) 5 (3) 15  
(2) 10 (4) 20 ( )

7. In which month did Felicia score the highest in Mathematics?
- (1) February (3) April  
 (2) March (4) May ( )

**Write your answers on the lines provided. [8 marks]**

8. Jeremy started practising for his piano recital at 16 40. He stopped at 18 15. How long did he practise for his piano recital? \_\_\_\_\_

9. Nancy started her school lessons at 07 45. Her lessons lasted for 5 h 30 min. What time did her lessons end? \_\_\_\_\_



Sister started reading her magazine at \_\_\_\_\_.

**The table shows the number of stamps and coins Dora collected from four different countries. Study the table below and answer questions 11 to 13.**

Country	Stamps	Coins
Malaysia	394	127
Indonesia	?	245
Thailand	125	169
Philippines	178	88

11. If Dora collected a total of 947 stamps, how many Indonesian stamps did she collect? \_\_\_\_\_
12. What was the total number of coins collected by Dora? \_\_\_\_\_
13. How many more stamps than coins did Dora collect? \_\_\_\_\_

14. Express 21 45 using the 12-hour clock. \_\_\_\_\_

15. Express 5.20 pm using the 24-hour clock. \_\_\_\_\_

**Do these word problems. Show your working clearly in the space provided. [5 marks]**

16. Mr Simon works from 9.30 pm every night. He will stop work at 7.55 am the next day. How long does he work every night?

17. When it is 07 00 in Glasgow, the clock in Singapore shows 14 00. If Jennifer wants to call her mother who is in Singapore at 20 00, at what time should she make the call in Glasgow?

18. A sports carnival ended at 13 25. The carnival lasted 4 h 40 min. What time did the carnival start?
19. Samantha attended a seminar at 2.30 pm. It ended at 5.15 pm. How long did the seminar last?
20. Trevor went to a bookstore at 16 10. He spent 3 h 5 min browsing books. What time did he leave the bookstore?