




Try this!



Ans: _____ △

From Fig 1,

$$4 \triangle + 2 \square \rightarrow 3 \bigcirc \quad \text{--- ①}$$

From Fig 2,

$$3 \triangle + \square \rightarrow 2 \bigcirc \quad \text{--- ②}$$

Compare ① and ②:

$$\triangle + \square \rightarrow \bigcirc$$

Look at ② again:

Adding $2 \square$ to both sides,

$$3 \triangle + \square + 2 \square \rightarrow 2 \bigcirc + 2 \square$$

$$3 \triangle + 3 \square \rightarrow \overbrace{2 \bigcirc + 2 \square}^{\bigcirc + \bigcirc} + 2 \square$$

This means $\triangle \rightarrow \square$, as each side has 6 units.

$$\bigcirc \rightarrow 2 \triangle$$

Ans: $5 \triangle$